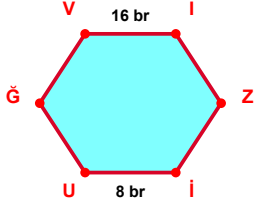
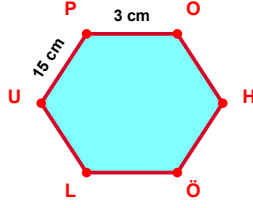


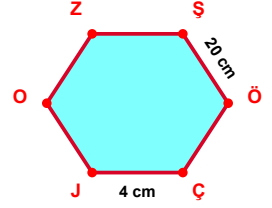
SORU: Aşağıdaki şekillerde verilen, kenar uzunlukları farklarını bulunuz.



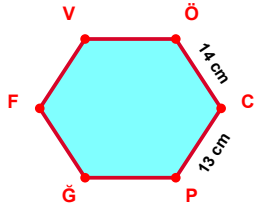
$$|VI| - |UI| = \dots\dots\dots$$



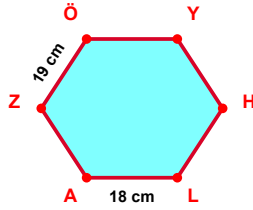
$$|UP| - |PO| = \dots\dots\dots$$



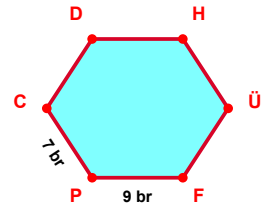
$$|ŞÖ| - |ÇJ| = \dots\dots\dots$$



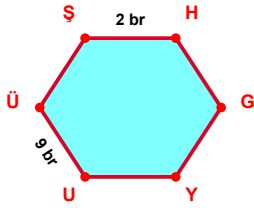
$$|ÖC| - |CP| = \dots\dots\dots$$



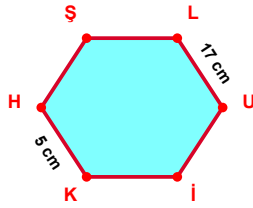
$$|ZÖ| - |LA| = \dots\dots\dots$$



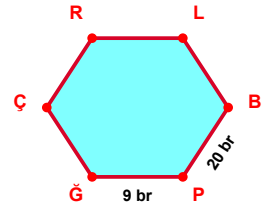
$$|FP| - |PC| = \dots\dots\dots$$



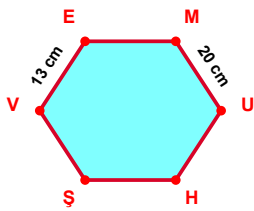
$$|UÜ| - |ŞH| = \dots\dots\dots$$



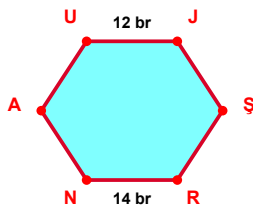
$$|LU| - |KH| = \dots\dots\dots$$



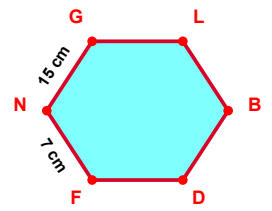
$$|BP| - |PĞ| = \dots\dots\dots$$



$$|MU| - |VE| = \dots\dots\dots$$

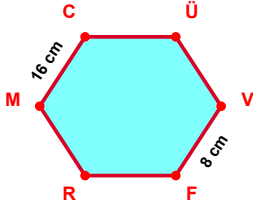


$$|RN| - |UJ| = \dots\dots\dots$$

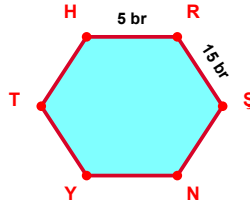


$$|NG| - |FN| = \dots\dots\dots$$

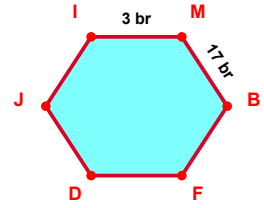
SORU: Aşağıdaki şekillerde verilen, kenar uzunlukları farklarını bulunuz.



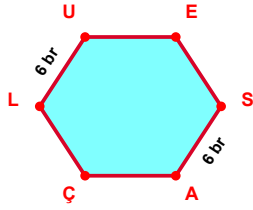
$|MC| - |VF| = \dots\dots\dots$



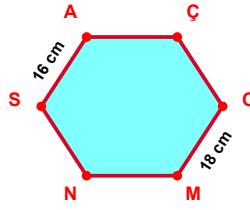
$|RS| - |HR| = \dots\dots\dots$



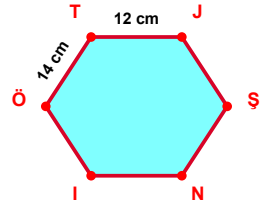
$|MB| - |IM| = \dots\dots\dots$



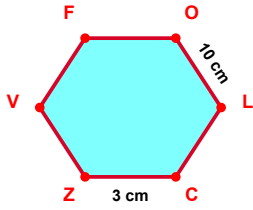
$|SA| - |LU| = \dots\dots\dots$



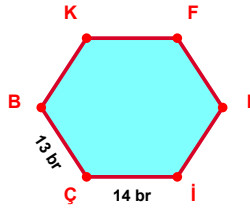
$|OM| - |SA| = \dots\dots\dots$



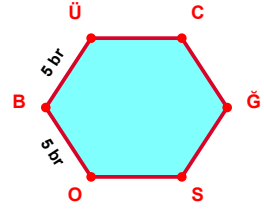
$|ÖT| - |TJ| = \dots\dots\dots$



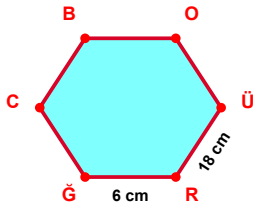
$|OL| - |CZ| = \dots\dots\dots$



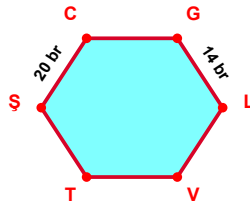
$|İÇ| - |ÇB| = \dots\dots\dots$



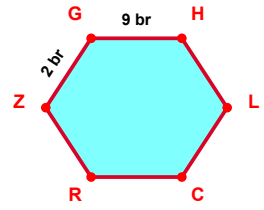
$|BÜ| - |OB| = \dots\dots\dots$



$|ÜR| - |RĞ| = \dots\dots\dots$



$|ŞC| - |GL| = \dots\dots\dots$



$|GH| - |ZG| = \dots\dots\dots$

SÜREÇ ODAKLI DEĞERLENDİRME ÖLÇEĞİ

Doğru Sayısı: / 24

Öğretmen ilgili kutucuğu işaretler.

Geliştirilmeli (0-8)

İyi (9-14)

Çok İyi (15-20)

Mükemmel (21-24)

☐☐☐☐

Hazırlayan:

Bu bölüme sınıfınızın ilgili kazanıma yönelik genel durumuna ilişkin gözlem ve izlenimlerinizi, öğrencilerinizin bu kazanımla ilgili öğrenme eksikliklerini ve bu eksikliklerin giderilmesi amacıyla yaptığınız/yapmayı planladığınız faaliyetleri not edebilirsiniz.

No	Adı - Soyadı	Toplam Puan	Değerlendirme
1			
2			
3			
4			
5			
6			
7			
8			
9			
10			
11			
12			
13			
14			
15			
16			
17			
18			
19			
20			
21			
22			
23			
24			
25			
26			
27			
28			
29			
30			
31			
32			
33			
34			
35			

Hazırlayan: